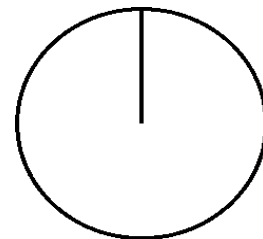


# Pizza-regning (58)

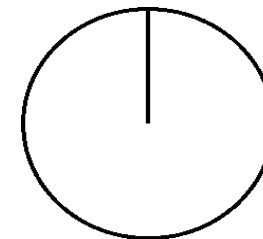
Omregn fra brøk til procent (med 1 decimal) og fra brøk til grader (hele tal).

Tegn derefter procentcirklen

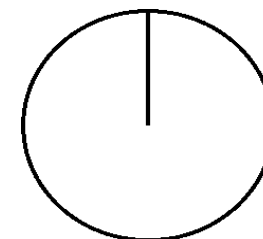
$$\frac{21}{126} = \frac{\quad}{\quad} = \quad \% = \frac{\quad}{\quad} = \quad =$$



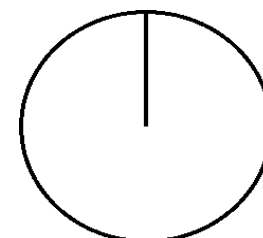
$$\frac{17}{68} = \frac{\quad}{\quad} = \quad \% = \frac{\quad}{\quad} = \quad =$$



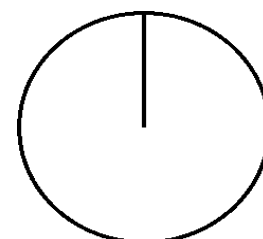
$$\frac{18}{73} = \frac{\quad}{\quad} = \quad \% = \frac{\quad}{\quad} = \quad =$$



$$\frac{15}{135} = \frac{\quad}{\quad} = \quad \% = \frac{\quad}{\quad} = \quad =$$



$$\frac{12}{84} = \frac{\quad}{\quad} = \quad \% = \frac{\quad}{\quad} = \quad =$$



$$\frac{19}{95} = \frac{\quad}{\quad} = \quad \% = \frac{\quad}{\quad} = \quad =$$

